

SINGAPORE'S  
#1 HOME TUITION AGENCY

.....○

# Need A Home Tutor?

🌐 [singaporetuitonteachers.com](http://singaporetuitonteachers.com)  
☎ +65 9695 3522

Contact Us Today For A 100% Free Tutor Request!

○.....

OUR TEST PAPERS ARE:

- ✓ **COMPLETELY FREE!**
- ✓ **SOURCED FROM TOP SCHOOLS**
- ✓ **HIGH-QUALITY**
- ✓ **USED BY 10,000+ SATISFIED STUDENTS**



# SINGAPORE'S #1 HOME TUITION AGENCY

---

## Need A Home Tutor?

 [singaporetuitionteachers.com](https://singaporetuitionteachers.com)

 +65 9695 3522

Contact Us Today For A 100% Free Tutor Request!

---

OUR TEST PAPERS ARE:

- ✓ **COMPLETELY FREE!**
- ✓ **SOURCED FROM TOP SCHOOLS**
- ✓ **HIGH-QUALITY**
- ✓ **USED BY 10,000+ SATISFIED STUDENTS**





**Cambridge International Examinations**  
Cambridge International General Certificate of Secondary Education

**ECONOMICS**

**0455/11**

Paper 1 Multiple Choice

**October/November 2015**

**45 minutes**

Additional Materials: Multiple Choice Answer Sheet  
Soft clean eraser  
Soft pencil (type B or HB is recommended)



**READ THESE INSTRUCTIONS FIRST**

Write in soft pencil.

Do not use staples, paper clips, glue or correction fluid.

Write your name, Centre number and candidate number on the Answer Sheet in the spaces provided unless this has been done for you.

**DO NOT WRITE IN ANY BARCODES.**

There are **thirty** questions on this paper. Answer **all** questions. For each question there are four possible answers **A, B, C** and **D**.

Choose the **one** you consider correct and record your choice in **soft pencil** on the separate Answer Sheet.

**Read the instructions on the Answer Sheet very carefully.**

Each correct answer will score one mark. A mark will not be deducted for a wrong answer.  
Any rough working should be done in this booklet.

This document consists of **10** printed pages and **2** blank pages.

1 A business person employs two people to make sandwiches to sell in a cafe.

As well as labour, which factors of production are involved in this activity?

- A capital, enterprise and land
- B capital and land only
- C capital and enterprise only
- D enterprise and land only

2 Why is choice an important part of the basic economic problem?

- A Choice is necessary to achieve an equilibrium price.
- B Limited resources have many uses.
- C Manufacturers produce a large variety of foods.
- D The market leads to an unequal distribution of goods.

3 A power plant is built to provide electricity to a rural area in Botswana.

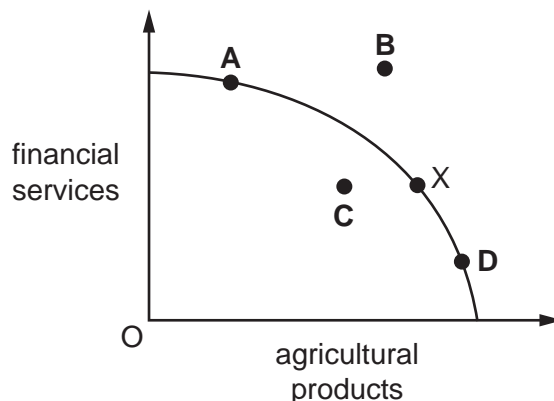
What is the opportunity cost to the local economy of building the plant?

- A the cost of the building materials
- B the price of electricity
- C the school which was not built as a result
- D the wages of the power plant workers

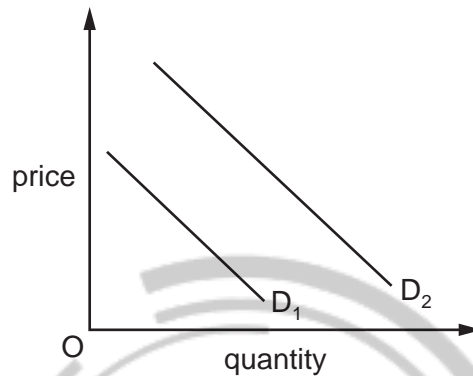
4 The diagram shows a production possibility curve for an economy that can provide financial services or agricultural products. The economy is at point X.

Bad weather destroys part of the agricultural produce.

At which point will the economy be in the diagram?



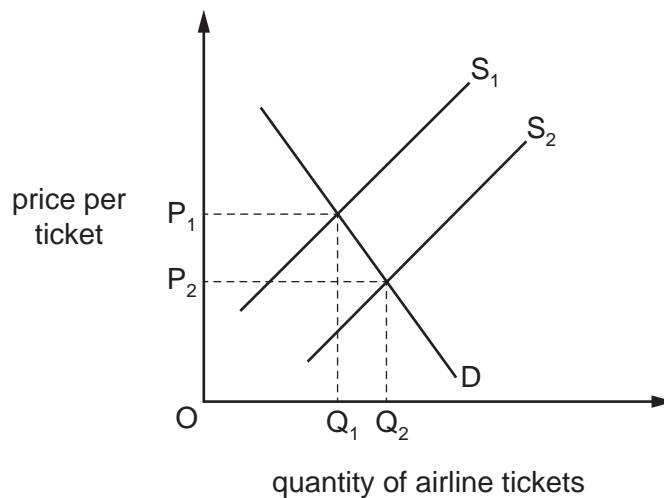
- 5 In a mixed economy, output is produced by
- A private enterprise and individuals.
  - B the market alone.
  - C the state alone.
  - D the state and private enterprise.
- 6 The diagram shows a shift in the demand curve for table-tennis balls.



What is the **most** likely cause for this shift in the demand curve?

- A a fall in the price of the equipment for substitute games
- B an increase in the membership of table-tennis clubs
- C a rise in membership fees of table-tennis clubs
- D the building of more sports clubs providing table-tennis

- 7 Air travel and rail travel are substitute forms of transport. The diagram shows the effect of new technology on the market for air travel.



What would be the most likely effect on the market for rail transport?

- A a decrease in demand for rail transport
  - B an increase in the price of rail tickets
  - C an increase in supply of rail transport
  - D an increase in the total income of rail companies
- 8 A developer built some large houses in a rural area which poorer people could not afford. The houses destroyed an area of natural beauty.

What type of market failure resulted from the development?

- A ignoring external cost
  - B inequality of income
  - C lack of information
  - D price discrimination
- 9 A country's central bank raised the rate of interest from 1% to 4% per year.

How would this change have affected the amount saved and the cost of borrowing by individuals?

	amount saved	cost of borrowing
<b>A</b>	decreased	decreased
<b>B</b>	decreased	increased
<b>C</b>	increased	decreased
<b>D</b>	increased	increased

- 10 When will a trade union be **less** likely to be able to achieve a rise in wages for its members?
- A during a recession
  - B in an economic boom
  - C when productivity is rising
  - D where there is a limited supply of labour

- 11 The table shows how three people spend their income.

	person R	person S	person T
food and clothing	20%	45%	35%
entertainment	40%	35%	40%
luxury goods	40%	20%	25%

Put the three people in the most likely order of their incomes, from the **lowest** income to the highest income.

- A R, S, T
  - B S, T, R
  - C T, R, S
  - D T, S, R
- 12 A market changes from perfect competition to monopoly.

What is likely to happen to output and price in this market?

	output	price
A	decrease	decrease
B	decrease	increase
C	increase	decrease
D	increase	increase

- 13 A company decided to reduce the price of its product by 10%.

What would happen?

- A The firm's costs would decrease if the elasticity of demand was greater than one.
- B The firm's profits would increase if the elasticity of demand was greater than one.
- C The firm's revenue would increase if the elasticity of demand was greater than one.
- D The quantity sold would decrease if the elasticity of demand was less than one.

- 14 The world's open-cast mining of mineral ores is dominated by a few multinational companies which employ relatively few workers.

What does this indicate?

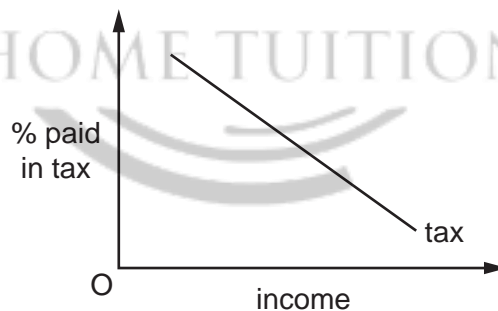
- A Production is capital-intensive.
- B Productivity of labour is low.
- C The market is perfectly competitive.
- D There is a monopoly of world production.

- 15 The table shows the information that managers of a company have from a week of business activity.

number of employees	100
average wage	\$900
value of output	\$100 000
rent	\$10 000
raw materials	\$20 000

Assuming there are no other costs, what is the value of the fixed costs?

- A \$300
  - B \$10 000
  - C \$20 000
  - D \$30 000
- 16 The diagram shows the percentage of income taken by a tax at different levels of income.

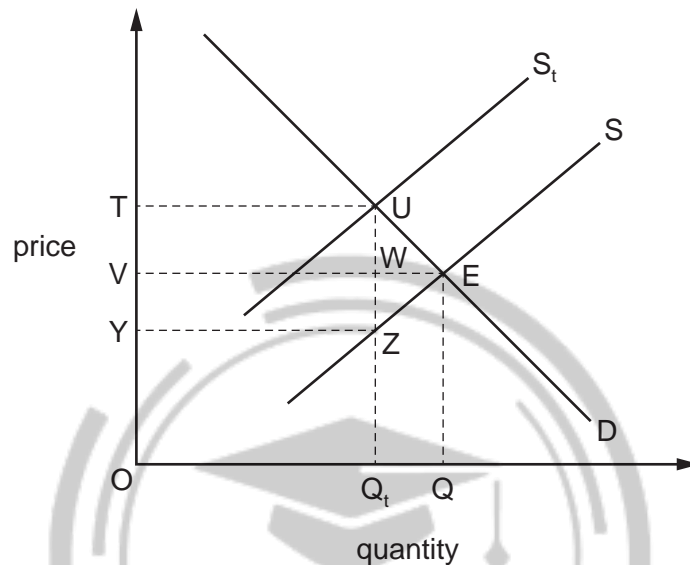


What term is used to describe the tax?

- A indirect
- B progressive
- C proportional
- D regressive



- 17 Which statement about the meaning of government economic aims is correct?
- A Economic growth means that a country's real output must rise over time.
  - B Full employment means that no one must be unemployed.
  - C Price stability means that the price of all goods and services must remain unchanged.
  - D Redistribution of income means that everyone must have equal incomes.
- 18 The diagram shows the imposition of a tax of UZ on a good.



Which area shows the government's tax revenue?

- A TUEV
  - B TUEZY
  - C TUWV
  - D TUZY
- 19 A government decided to increase its spending on building schools and hospitals.
- Which aim of government policy is most likely to be achieved by this increase?
- A a balance of payments surplus
  - B a stronger exchange rate
  - C economic growth
  - D price stability

- 20 To make Gross Domestic Product a better measure of comparative living standards it needs to be adjusted by
- A deducting the effects of exports and inflation.
  - B deducting the effects of imports and exports.
  - C deducting the effects of population change and exports.
  - D deducting the effects of population change and inflation.
- 21 What is **not** involved in the construction of a retail price index?
- A a base year
  - B a basket of goods
  - C the income tax rate
  - D the weighting of products
- 22 What is likely to fall when the rate of unemployment in a country falls?
- A business confidence
  - B consumer spending
  - C government budget deficit
  - D government revenue from taxes
- 23 The table shows the percentage change in earnings and consumer prices for four countries for one year.

Which country will have experienced a constant level of real income during the year?

	earnings	consumer prices
<b>A</b>	7.5	6
<b>B</b>	5	4
<b>C</b>	3	3
<b>D</b>	0	2

24 How would the proportions of different age groups in the population compare between low-income developing countries and high-income developed countries?

Low-income developing countries would have a

- A higher proportion of the elderly and higher proportion of young people.
- B higher proportion of the elderly and lower proportion of young people.
- C lower proportion of the elderly and higher proportion of young people.
- D lower proportion of the elderly and lower proportion of young people.

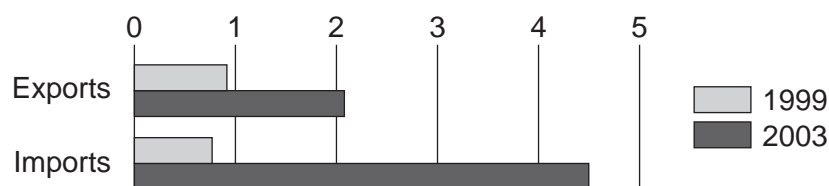
25 Which feature would be most helpful in identifying a typical developing country?

- A the level of Gross Domestic Product
- B the rate of rural to urban migration
- C the size of geographical area
- D the size of the population

26 How is a sharp rise in the price of oil likely to be seen by different oil-consuming countries?

	oil-consuming countries with a low standard of living	oil-consuming countries with a high standard of living
A	desirable and manageable	desirable and unmanageable
B	desirable and unmanageable	desirable and manageable
C	undesirable and manageable	undesirable and unmanageable
D	undesirable and unmanageable	undesirable and manageable

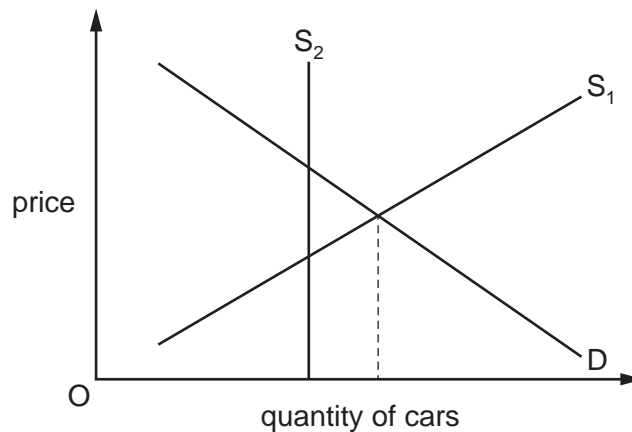
27 The diagram shows China's trade with Brazil for 1999 and 2003 in billions of dollars.



With reference to the diagram, what happened to China's trade balance with Brazil between 1999 and 2003?

- A It experienced a falling surplus.
- B It experienced a rising deficit.
- C It moved from deficit to surplus.
- D It moved from surplus to deficit.

28 The diagram shows the market for imported cars.



Which government action could be shown by the change in the diagram?

- A an embargo
  - B an exchange rate revaluation (appreciation)
  - C an import tax
  - D a quota
- 29 What is most likely to encourage international specialisation?
- A similarities in climate in different countries
  - B the ability to produce products more cheaply than other countries
  - C the discovery of oil in a country that had no oil before
  - D very high international transport costs
- 30 Turkey's agricultural sector employs 48% of the country's workforce, compared with 17% in the United States (US) and 3.9% in France.

What could be concluded from this?

- A France is likely to import more agricultural produce than the US.
- B The workers in France are not as productive as those in Turkey.
- C Total agricultural production is likely to be higher in Turkey than in the US.
- D Turkey is likely to be less developed than France.

**BLANK PAGE**



**BLANK PAGE**



---

Permission to reproduce items where third-party owned material protected by copyright is included has been sought and cleared where possible. Every reasonable effort has been made by the publisher (UCLES) to trace copyright holders, but if any items requiring clearance have unwittingly been included, the publisher will be pleased to make amends at the earliest possible opportunity.

To avoid the issue of disclosure of answer-related information to candidates, all copyright acknowledgements are reproduced online in the Cambridge International Examinations Copyright Acknowledgements Booklet. This is produced for each series of examinations and is freely available to download at [www.cie.org.uk](http://www.cie.org.uk) after the live examination series.

Cambridge International Examinations is part of the Cambridge Assessment Group. Cambridge Assessment is the brand name of University of Cambridge Local Examinations Syndicate (UCLES), which is itself a department of the University of Cambridge.

**CAMBRIDGE INTERNATIONAL EXAMINATIONS**

Cambridge International General Certificate of Secondary Education

**MARK SCHEME for the October/November 2015 series**

**0455 ECONOMICS**

**0455/11**

Paper 1 (Multiple Choice), maximum raw mark 30

Mark schemes should be read in conjunction with the question paper and the Principal Examiner Report for Teachers.

Cambridge will not enter into discussions about these mark schemes.

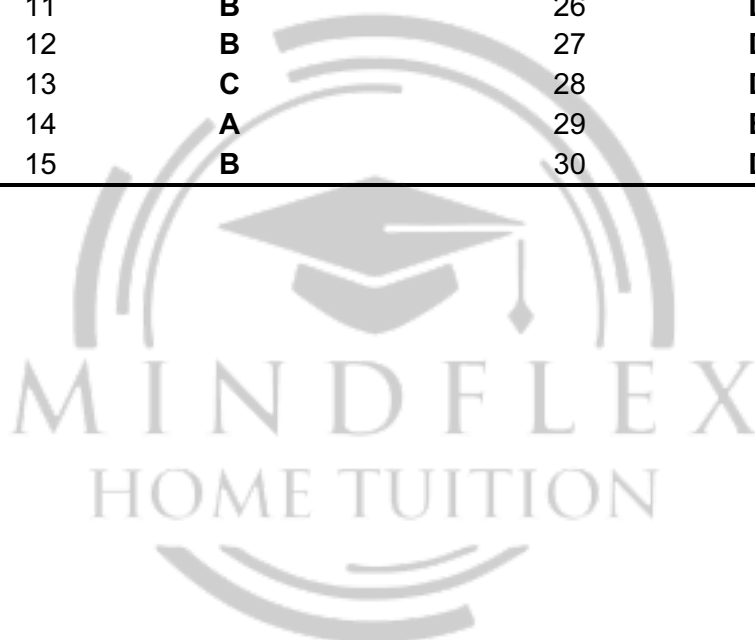
Cambridge is publishing the mark schemes for the October/November 2015 series for most Cambridge IGCSE<sup>®</sup>, Cambridge International A and AS Level components and some Cambridge O Level components.

MIND FLEX  
HOME TUITION

© IGCSE is the registered trademark of Cambridge International Examinations.

<b>Page 2</b>	<b>Mark Scheme</b>	<b>Syllabus</b>	<b>Paper</b>
	<b>Cambridge IGCSE – October/November 2015</b>	<b>0455</b>	<b>11</b>

<i>Question Number</i>	<i>Key</i>	<i>Question Number</i>	<i>Key</i>
1	<b>A</b>	16	<b>D</b>
2	<b>B</b>	17	<b>A</b>
3	<b>C</b>	18	<b>D</b>
4	<b>C</b>	19	<b>C</b>
5	<b>D</b>	20	<b>D</b>
6	<b>B</b>	21	<b>C</b>
7	<b>A</b>	22	<b>C</b>
8	<b>A</b>	23	<b>C</b>
9	<b>D</b>	24	<b>C</b>
10	<b>A</b>	25	<b>B</b>
11	<b>B</b>	26	<b>D</b>
12	<b>B</b>	27	<b>D</b>
13	<b>C</b>	28	<b>D</b>
14	<b>A</b>	29	<b>B</b>
15	<b>B</b>	30	<b>D</b>





Cambridge  
**IGCSE**

**Cambridge International Examinations**  
Cambridge International General Certificate of Secondary Education

**ECONOMICS**

**0455/21**

Paper 2 Structured Questions

**October/November 2015**

**2 hours 15 minutes**

No Additional Materials are required.

**READ THESE INSTRUCTIONS FIRST**

An answer booklet is provided inside this question paper. You should follow the instructions on the front cover of the answer booklet. If you need additional answer paper ask the invigilator for a continuation booklet.

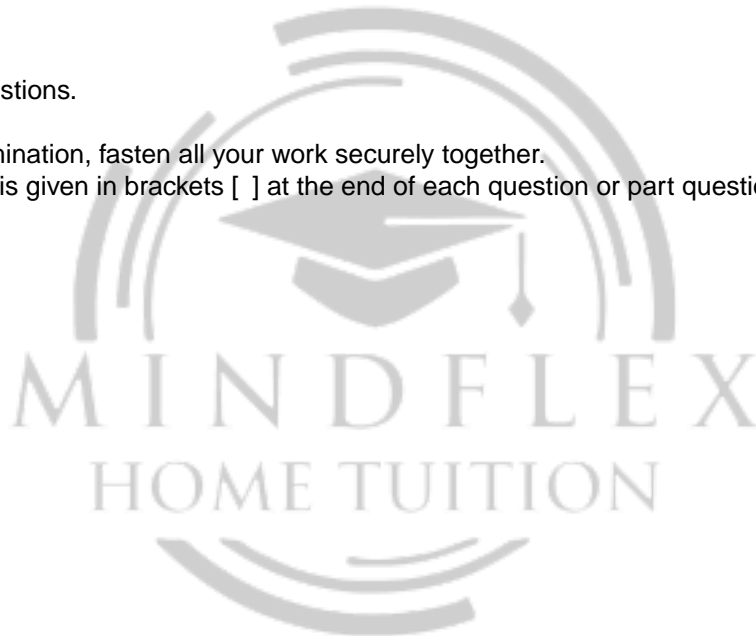
**Section A**

Answer Question 1.

**Section B**

Answer any **three** questions.

At the end of the examination, fasten all your work securely together.  
The number of marks is given in brackets [ ] at the end of each question or part question.



This document consists of **5** printed pages, **3** blank pages and **1** Insert.

## Section A

Answer this question.

### 1 Cambodia aims to be a top rice exporter

Currently approximately 80% of Cambodia's export revenue comes from the sale of clothing. The Cambodian Government wants to encourage clothing producers to export more but its current priority is to promote the export of rice. In 2012 Cambodia was the world's seventh largest exporter of rice. The government aim is for the country to be in the top five. Raising export revenue above its 2012 level of US\$6 billion would reduce the country's deficit on the current account of its balance of payments.

To achieve the government's aim, there are a number of improvements that need to be made to increase Cambodia's Gross Domestic Product (GDP). One is to develop the country's infrastructure, including building more roads and ports. Better transport infrastructure needs to be combined with increased investment in the agriculture industry. In addition, the skills of farm workers need to be developed. Those farm workers already skilled need to be encouraged to stay in the country rather than emigrate.

The Cambodian Government is also seeking to increase investment in the manufacturing and service sectors. Investment is influenced by a range of factors. One of the most important of these is the economic growth rate. Countries with a high economic growth rate tend to spend a high proportion of their income on capital goods.

**Table 1 Economic growth rates and investment in selected countries in 2012**

Country	Economic growth rate (% change in GDP)	Investment (as % of GDP)
Cambodia	7.5	20
China	8.2	48
India	8.0	35
Indonesia	6.3	33
Malaysia	6.0	19
Pakistan	4.0	15

Cambodia is attracting investment from other countries, most significantly from China. Such investment is the result of a number of factors including a young population and improvements in the country's financial sector. In 2012 the country's population was 15 million with the birth rate exceeding the death rate by 13 per thousand of the population. Emigration exceeded immigration with a net migration rate of minus 0.3 per thousand of the population.

In 2012 Cambodia opened its first stock exchange which is called the Cambodian Securities Exchange (CSX). The first company to trade on the CSX was the Phnom Penn Water Supply Authority. The Cambodian company is recognised as one of the most efficient water companies in Asia. It is a popular company to work for, partly because it pays relatively high wages.

- (a) Using information from the extract, calculate the value of Cambodia's clothing exports in 2012. [2]
- (b) Explain **two** reasons why demand for Cambodia's rice may increase in the future. [4]
- (c) (i) Explain why high economic growth can increase investment. [4]  
(ii) Using Table 1, comment on whether the information supports the view that high economic growth leads to a high rate of investment. [3]
- (d) Using information from the extract, explain whether Cambodia experienced an increase or a decrease in population in 2012. [2]
- (e) Discuss whether building more roads and ports would increase Cambodia's exports of rice. [5]
- (f) Explain **two** functions of a stock exchange. [4]
- (g) Discuss whether a company will have to raise wage rates to attract more workers. [6]



**Section B**

Answer any **three** questions from this section.

- 2 A lack of electricity regularly results in power failure in the Lebanon. The daily gap between supply and demand may increase if the Lebanese economy continues to grow. The Lebanese Government is planning to build more power stations but there is a risk that the social costs of operating power stations may be greater than the social benefits.
- (a) Define 'demand'. [2]
  - (b) Explain what impact an imbalance between supply and demand is likely to have on price and the quantity traded. [4]
  - (c) Analyse why economic growth may increase demand for electricity. [6]
  - (d) Discuss whether the social costs of operating power stations are likely to be greater than the social benefits. [8]
- 3 The average income in Mexico is rising but a number of people in the country are still poor. Carlos Slim is a Mexican entrepreneur and one of the richest men in the world. His companies dominate the mobile (cell) phone and landline phone markets in the country and employ a high number of specialised workers. The Mexican Government, however, is seeking to increase competition in the communications market.
- (a) Identify **two** functions of an entrepreneur. [2]
  - (b) Explain **two** ways a government could redistribute income from the rich to the poor. [4]
  - (c) Analyse why price may be higher and output lower in a monopoly than in a more competitive market. [6]
  - (d) Discuss whether workers benefit from specialising. [8]
- 4 China's solar power industry has the biggest solar panel firms in the world. Their growth has been helped by low labour costs and government subsidies. Solar panel firms are smaller in Europe where some are sole proprietors. In 2013 the European Union was considering imposing a tariff of 47% on Chinese solar panels.
- (a) Identify **two** features of a sole proprietor. [2]
  - (b) Explain how government subsidies can increase the size of firms. [4]
  - (c) Analyse **three** advantages of small firms. [6]
  - (d) Discuss whether imposing tariffs will benefit an economy. [8]

- 5 The Brazilian economy ran into difficulties in 2013. Its inflation rate rose above its Central Bank's target. More than two-thirds of the items used to calculate the inflation rate rose in price. The economic growth rate declined with fewer jobs being created. As the labour force grows in size, more jobs have to be created to avoid unemployment increasing. Greater free trade might improve Brazil's economic performance.
- (a) Identify **two** causes of an increase in the size of a country's labour force. [2]
  - (b) Explain how a country's inflation rate is measured. [4]
  - (c) Analyse how free trade can reduce firms' costs of production. [6]
  - (d) Discuss whether unemployment always harms an economy. [8]
- 6 In 2013 the Japanese Government used a range of policies, including monetary policy, to increase consumer expenditure and investment to avoid deflation. At the same time, some Japanese politicians were arguing that the government should increase the rate of the country's sales tax from 5% to 10%. Sales tax is an indirect and regressive tax.
- (a) Define 'regressive tax'. [2]
  - (b) Explain **two** influences on the amount firms spend on capital goods. [4]
  - (c) Analyse how monetary policy could increase the price level. [6]
  - (d) Discuss whether an increase in the rate of a sales tax would benefit an economy. [8]
- 7 The world's population is forecast to rise to 9 billion by 2050. It is predicted that Nigeria, a developing country with a mixed economy, will move from having the seventh largest population at 158 million in 2013 to having the third largest at 400 million in 2050. Some governments try to reduce the growth of their populations by using a range of government policy measures.
- (a) Define 'mixed economy'. [2]
  - (b) Explain **two** reasons why the world population in 2050 may be more than forecast. [4]
  - (c) Analyse how the population structure of a developing country is likely to differ from that of a developed country. [6]
  - (d) Discuss the effectiveness of possible government policy measures to reduce the growth of population. [8]

**BLANK PAGE**



**BLANK PAGE**



**BLANK PAGE**



---

Permission to reproduce items where third-party owned material protected by copyright is included has been sought and cleared where possible. Every reasonable effort has been made by the publisher (UCLES) to trace copyright holders, but if any items requiring clearance have unwittingly been included, the publisher will be pleased to make amends at the earliest possible opportunity.

To avoid the issue of disclosure of answer-related information to candidates, all copyright acknowledgements are reproduced online in the Cambridge International Examinations Copyright Acknowledgements Booklet. This is produced for each series of examinations and is freely available to download at [www.cie.org.uk](http://www.cie.org.uk) after the live examination series.

Cambridge International Examinations is part of the Cambridge Assessment Group. Cambridge Assessment is the brand name of University of Cambridge Local Examinations Syndicate (UCLES), which is itself a department of the University of Cambridge.



**CAMBRIDGE INTERNATIONAL EXAMINATIONS**

Cambridge International General Certificate of Secondary Education

**MARK SCHEME for the October/November 2015 series**

**0455 ECONOMICS**

**0455/21**

Paper 2 (Structured Questions), maximum raw mark 90

This mark scheme is published as an aid to teachers and candidates, to indicate the requirements of the examination. It shows the basis on which Examiners were instructed to award marks. It does not indicate the details of the discussions that took place at an Examiners' meeting before marking began, which would have considered the acceptability of alternative answers.

Mark schemes should be read in conjunction with the question paper and the Principal Examiner Report for Teachers.

Cambridge will not enter into discussions about these mark schemes.

Cambridge is publishing the mark schemes for the October/November 2015 series for most Cambridge IGCSE<sup>®</sup>, Cambridge International A and AS Level components and some Cambridge O Level components.

® IGCSE is the registered trademark of Cambridge International Examinations.

Page 2	Mark Scheme	Syllabus	Paper
	Cambridge IGCSE – October/November 2015	0455	21

1 (a) Using information from the extract, calculate the value of Cambodia's clothing exports in 2012. [2]

US\$4.8bn or \$4 800 000 000 (2)

80/100 x US \$6bn (1)

(b) Explain two reasons why demand for Cambodia's rice may increase in the future. [4]

- lower price (1) due to lower transport costs (1)
- better quality (1) due to e.g. more skilled workers (1)
- higher incomes (1) increasing their ability to buy the rice (1)
- rise in population (1) more people to buy the rice (1)
- rise in the price of rice produced by other countries (1) some people switch to Cambodian rice (1)
- fall in the value of the Cambodian currency (1) making their rice relatively cheap (1)
- rise in price of competing products (1) e.g. other staple foods such as wheat (1)

(c) (i) Explain why high economic growth can increase investment. [4]

- high economic growth involves an increase in output (1) to produce more, firms are likely to spend more on capital goods (1)
- high economic growth involves an increase in incomes (1) this will lead to an increase in demand for firms' products (1)
- high economic growth means an increase in output (1) this may encourage firms to expand their capacity (1)
- high economic growth may mean that profits are high (1) high profits provide the finance to buy capital goods (1)
- high economic growth can increase firms' confidence (1) being more optimistic may mean that firms will be more willing to invest (1)
- high economic growth attracts overseas investors (1) because of prospect of secure returns (1)
- high economic growth increases tax revenues (1) this allows the government to spend more on e.g. investing in infrastructure (1)

(ii) Using Table 1, comment on whether the information supports the view that high economic growth leads to a high rate of investment. [3]

**One mark for decision:**

- yes/generally yes

**One mark for supporting evidence e.g.:**

- four countries are in the same ranking order (China, India, Malaysia and Pakistan)
- two examples e.g. China has the highest for both categories whilst Pakistan has the lowest

**One mark for exception:**

- exceptions – Cambodia or Indonesia

Page 3	Mark Scheme	Syllabus	Paper
	Cambridge IGCSE – October/November 2015	0455	21

- (d) Using information from the extract, explain whether Cambodia experienced an increase or a decrease in population in 2012. [2]  
Increase (1) as the birth rate exceeded the death rate and its difference (natural increase) was greater than the net migration (1).

- (e) Discuss whether building more roads and ports would increase Cambodia's exports of rice. [5]

**Up to 3 marks for why it might:**

- may reduce transport costs (1) reduce costs of production (1) reduce prices (1) make rice more price competitive (1)
- enables more rice to reach the coast/easier distribution of rice/easier access (1) and enables more rice to be shipped abroad (1) increase quality of exports (1) make rice more quality competitive (1) open up new markets (1)

**Up to 3 marks for why it might not:**

- costs other than transport costs may rise (1)
- demand for road space may increase more than supply (1) increasing congestion (1) increasing transport costs (1)
- there is no guarantee that farmers would use the new roads (1)
- there will be no increase in exports if agriculture lacks investment to increase output (1)
- the quality of the roads and ports built may be poor (1) particularly if there is a lack of skilled workers to build them (1)
- there may be a lack of associated capital equipment e.g. vehicles to use roads and ports (1)
- demand for rice may fall (1) due to e.g. changes in tastes (1) costs and prices falling more in other countries (1)
- supply of rice may fall (1) due to e.g. bad weather (1)

- (f) Explain two functions of a stock exchange. [4]

- provides a market for the sale and/or purchase of shares (1) enabling firms to raise finance (1)
- allows members of the public to own part of a company (1) which may enable them to influence the behaviour of the company (1)
- provides a market for the sale of government securities (1) enabling governments to raise finance/borrow (1)
- enables firms to grow (1) by merging or taking over other firms (1)
- channels savings (1) for financial investment (1)
- acts as a source of information on share prices (1) enabling transactions to be carried out more effectively (1)
- protects buyers of shares/supervises brokers (1) as listed firms have to meet set standards and provide information (1)

Page 4	Mark Scheme	Syllabus	Paper
	Cambridge IGCSE – October/November 2015	0455	21

(g) Discuss whether a company will have to raise wage rates to attract more workers. [6]

**Up to 4 marks for why it might:**

- wages are a key influence on people's choice of where to work (1)
- there may be a shortage of workers (1)
- companies compete for workers (1)
- to attract workers from other companies, wages may have to be raised (1)
- higher wages could attract workers from a long distance away who otherwise would not be able to afford the transport costs (1)

**Up to 4 marks for why it might not:**

- unemployment may be high (1) so the offer of a job may be sufficient to attract workers (1)
- the company may already be paying more than other companies (1) so again just the offer of jobs may be sufficient (1)
- the company can offer non-wage (non-pecuniary) benefits/fringe benefits (1) e.g. better promotion chances, longer holidays, good pensions, job security (up to 2 marks)

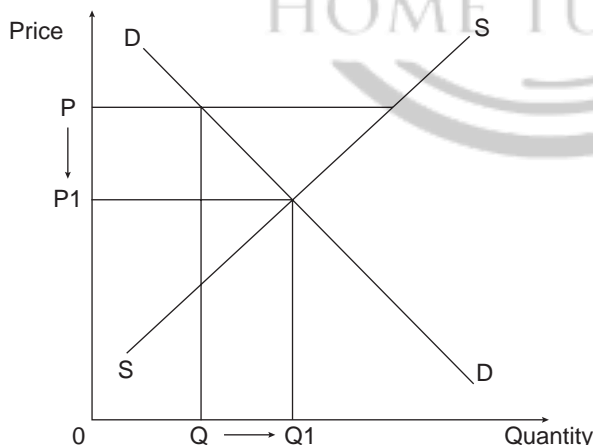
2 (a) Define 'demand'. [2]

- the willingness (1) and ability to buy a product (1)

(b) Explain what impact an imbalance between supply and demand is likely to have on price and the quantity traded. [4]

- if supply exceeds demand (1), there will be a surplus (1)
- the equilibrium position in the market will change (1)
- price will fall/be driven down (1)
- the quantity traded will rise (1)

Accept a diagrammatic approach for up to 2 marks.

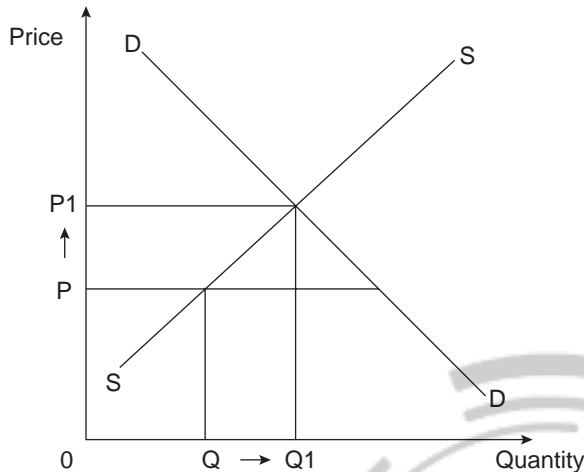


Page 5	Mark Scheme	Syllabus	Paper
	Cambridge IGCSE – October/November 2015	0455	21

OR

- if demand exceeds supply (1) there will be a shortage (1)
- the equilibrium position in the market will change (1)
- price will rise/be driven up (1)
- the quantity traded will rise (1)

Accept a diagrammatic approach for up to 2 marks.



(c) Analyse why economic growth may increase demand for electricity. [6]

- economic growth will increase income (1) higher income will increase demand for e.g. televisions and laptops (1) electricity is a complement to televisions etc./used to operate televisions (1)
- with higher income, some people may switch from other fuels to electricity (1)
- economic growth involves higher output (1) electricity is used in the production of a variety of products (1) higher output will require more electricity (1)
- economic growth involves investment in capital equipment (1) e.g. new machines will require electricity to run them/electricity is a complement (1)
- economic growth often involves new technologies (1) which use electricity to function (1)
- with economic growth more people will now have access to electricity (1) more towns and villages may now be on the grid/electricity may have reached more areas (1)

(d) Discuss whether the social costs of operating power stations are likely to be greater than the social benefits. [8]

Either Social costs = private costs + external costs or social benefits = private benefits + external benefits (1)

Up to 3 marks for explaining social costs:

- private costs are costs to producers/consumers (1) examples: labour costs, rent, insurance (up to 2)
- external costs are harmful effects on third parties/social costs minus private costs (1) examples: air pollution, noise pollution, risk of accidents, fall in price of nearby houses (up to 2)

Page 6	Mark Scheme	Syllabus	Paper
	Cambridge IGCSE – October/November 2015	0455	21

**Up to 3 marks for explaining social benefits:**

- private benefits are benefits to producers/consumers (1) examples: revenue, satisfaction gained from consuming the fuel generated, reduction in risk of power outages (up to 2)
- external benefits are beneficial effects on third parties/social benefits minus private benefits (1) examples: rise in employment in the area, improved transport links in the area (up to 2)

**Up to 3 marks for coming to a conclusion e.g.:**

- may be influenced by whether the power stations are run by the state or the private sector (1) state sector may be more inclined to base decisions on social costs and benefits (1)
- may be influenced by the government policy measures (1) designed to reduce market failure (1) external costs may be minimised by e.g. taxes, laws (1)
- may be influenced by the age of the equipment used (1) old equipment may be more likely to cause external costs (1)
- private costs are likely to be very high for a power station (1) because of the large and expensive capital equipment involved (1)

**3 (a) Identify two functions of an entrepreneur. [2]**

- bearing (uninsurable) risks (1)
- organising the other factors of production (1)
- making key business decisions (1).

**(b) Explain two ways a government could redistribute income from the rich to the poor. [4]**

- taxing the rich (1) imposing progressive taxes (1) reducing regressive taxation (1)
- using government spending to benefit the poor (1) e.g. providing free healthcare / education for the poor (1)
- using government spending to generate jobs for the unskilled/introduce a minimum wage (1) make it easier for people to gain employment/increase earnings of low paid workers (1)

**(c) Analyse why price may be higher and output lower in a monopoly than in a more competitive market. [6]**

- a monopoly may restrict output (1) to drive up price (1)
- monopolies are price makers (1) and can therefore charge high prices if they wish (1)
- there are barriers to enter into a monopoly (1) this causes lack of competitors/substitutes (1) meaning that consumers have no choice (1) so have to pay the higher price (1)
- a firm in a more competitive market will have less influence on price (1) if they raise price (1) consumers will switch to rival firms (1)
- firms in (perfectly) competitive markets are price takers (1) and so have no influence on price (1)
- firms in competitive markets have to keep their costs low (1) in order to remain competitive (1)

Page 7	Mark Scheme	Syllabus	Paper
	Cambridge IGCSE – October/November 2015	0455	21

(d) Discuss whether workers benefit from specialising. [8]

**Up to 5 marks for why they might:**

- their specialism may be in high demand (1) leading to good employment opportunities (1) high wages (1)
- specialisation allows workers to develop their skills (1) increasing their productivity/efficiency (1) which enables employers to pay them more (1) for the value of their extra output (1)
- enable workers to concentrate on areas they most enjoy (1) e.g. history lecturers specialising in particular periods of history (1)
- specialised jobs may be less demanding (1) may need less training (1)

**Up to 5 marks for why they might not:**

- demand for specialism may decrease (1) leading to unemployment (1) may be difficult to get another job (1) specialists have low occupational mobility (1)
- time has to be spent acquiring specialist skills (opportunity cost) (1) this time could have been spent earning money (1)
- doing the same task may be boring (1) reducing the quality of life (1)
- alienation reduces productivity (1) reducing the amount firms are able to pay workers (1)
- may not find out what other talents they have (1)
- specialist tasks can depend heavily on other workers (1) if those workers perform badly then productivity falls (1) and wages may fall (1)

4 (a) Identify two features of a sole proprietor. [2]

- a business owned by one person (1)
- has unlimited liability (1)
- lack of continuity (1)
- takes all of the profits/bears all of the risks/losses alone (1)

(b) Explain how government subsidies can increase the size of firms. [4]

- government subsidies are payments to producers (1) they effectively reduce firms' costs of production (1) this encourages an increase in supply (1) the resulting lower price will raise demand (1) producing more will increase the size of firms (1)
- subsidises to domestic producers make them more internationally competitive (1) enabling them to capture more of foreign and domestic markets (1)
- subsidises can be used to buy capital equipment/invest in new technology or research (1) expanding productive capacity (1)
- subsidies can be used to increase wages or reduce wage costs (1) this can lead to more workers being employed (1) a larger workforce increases the size of firms (1)



Page 8	Mark Scheme	Syllabus	Paper
	Cambridge IGCSE – October/November 2015	0455	21

(c) Analyse three advantages of small firms. [6]

- flexible (1) can adjust quickly to changes in market conditions as fewer people to consult (1)
- better communication with workforce (1) because of simple structure of firm (1)
- can provide a more personalised service (1) more contact with consumers so can meet specific needs (1)
- can specialise in niche markets (1) demand for particular products/types of products may be low and a large firm may not cater for such a small market (1)
- may have low transport costs (1) located close to customers (1)
- may receive government subsidises (1) to encourage new firms/because they generate jobs (1)
- may be charged a lower rate of tax (e.g. corporation tax) (1) reducing the firm's costs (1)
- easy to set up (1) initially not much capital may be involved in the form of e.g. factory buildings (1)
- less likelihood of trade unions (1) wage costs will be lower (1)

(d) Discuss whether imposing tariffs will benefit an economy. [8]

**Up to 5 marks for why it might:**

- will raise revenue for the government (1) this could be spent on e.g. healthcare / education (1)
- may reduce demand for imports (1) improve the trade in goods position (1) and so improve the current account position (1)
- may protect infant industries (1) these may grow and take advantage of economies of scale (1) become internationally competitive (1) create output and employment (1)
- may protect declining industries (1) preventing unemployment (1)
- may prevent dumping (1) foreign firms selling at below cost price (1) prevent domestic firms being driven out of business (1)
- may protect consumers from harmful products (1)

**Up to 5 marks for why it might not:**

- raise prices to consumers (1) may not have domestic products to switch to (1) any domestic substitutes may be of a lower quality (1) reduces variety for consumers (1)
- raise costs of imported raw materials (1) raise costs of production (1) cause cost-push inflation (1)
- reduction in competitive pressure on domestic firms (1) may lead to inefficiency (1)
- there may be retaliation (1) with other countries imposing tariffs on the country's exports (1)
- there may not be domestic substitutes for imports (1) consumers may not stop buying imports (1) because of inelastic demand (1)



Page 9	Mark Scheme	Syllabus	Paper
	Cambridge IGCSE – October/November 2015	0455	21

5 (a) Identify **two** causes of an increase in the size of a country's labour force. [2]

1 mark for each of **two** causes identified:

- rise in retirement age
- fall in school leaving age
- immigration
- rise in birth rate (some years before)
- fall in death rate
- greater acceptability of women working

(b) Explain how a country's inflation rate is measured. [4]

- CPI/RPI (1)
- base year selected (1)
- survey of spending patterns undertaken (1)
- a basket of goods and services selected (1)
- weights selected (1) based on proportion of total spending devoted to the items (1)
- price changes monitored in a number of outlets (1)
- weights are multiplied by price changes (1)
- price level compared with previous year's price level (1)

(c) Analyse how free trade can reduce firms' costs of production. [6]

- can allow a country to specialise in what it's best at (1) use resources more efficiently (1)
- no tariffs charged on exports/imports (1)
- increase competition (1) may force firms to reduce costs/increase productivity (1)
- larger market (1) firms may be more able to take advantage of economies of scale (1) example(s) (1)
- more sources of raw materials/capital goods (1) lower price or better quality (1)

(d) Discuss whether unemployment always harms an economy. [8]

**Up to 5 marks for why it might:**

- lower output/incomes (1) lower living standards (1) increased poverty (1)
- lower demand (1) from consumers who are now unemployed (1)
- loss of tax revenue (1) lower expenditure on e.g. transport infrastructure (1)
- increased government spending on benefits (1) involves an opportunity cost (1)
- not using factors of production efficiently (1) waste of resources/opportunity cost (1) output below potential output (1)

**Up to 5 marks for why it might not:**

- unemployment may be low (1) frictional unemployment is always present (1)
- duration of unemployment may only be short term (1)
- some unemployment provides flexibility (1) enables firms to expand (1)
- may put downward pressure on inflation (1) lower demand (1) workers more reluctant to ask for wage rises (1)

Page 10	Mark Scheme	Syllabus	Paper
	Cambridge IGCSE – October/November 2015	0455	21

- 6 (a) Define 'regressive tax'. [2]  
A tax that takes a higher proportion of the income of the poor. (2)  
A tax that falls more heavily on the poor. (1)

- (b) Explain two influences on the amount firms spend on capital goods. [4]

- the amount of profits earned (1) high profits provide the finance and incentive to invest (1)
- the size of the firm (1) large firms are able to finance large scale capital investment (1)
- the type of firm (1) e.g. a steel producing firm will use a higher value of capital goods than a flower seller (1)
- interest rates (1) low interest rates allow firms to borrow cheaply for investment (1)
- inflation (1) a low rate of inflation gives firms confidence to invest (1)
- economic stability (1) a stable economy gives firms confidence to invest (1)
- corporation tax (1) a lower rate of corporation tax provides the finance and incentive to invest (1)
- advances in technology (1) may encourage firms to replace existing machines (1)
- expectations (1) if firms anticipate selling more in the future, they may expand (1)
- price of labour (1) a rise in wages may cause firms to replace labour with capital (1)

- (c) Analyse how monetary policy could increase the price level. [6]

- a decrease in the rate of interest (1) may increase borrowing (1) reduce saving (1) increase demand (1) cause demand-pull inflation (1)
- increase money supply (1) raise spending/total demand (1) cause demand-pull/monetary inflation (1)
- reduce the exchange rate (1) increase price of imported materials (1) reduce pressure on domestic firms to keep costs down (1) cause cost-push inflation (1)
- reducing the exchange rate will reduce export prices (1) increase total demand (1) cause demand-pull inflation (1)

- (d) Discuss whether an increase in the rate of a sales tax would benefit an economy. [8]

**Up to 5 marks for why it might:**

- may provide more government tax revenue (1) enable the government to spend more (1) e.g. may raise educational standards (1)
- may discourage consumption of harmful products (1) those that cause external costs (1) may reduce e.g. healthcare costs from smoking (1)
- may discourage the purchase of imports (1) improve current account position (1)
- could be used to reduce a budget deficit/increase a surplus (1)
- could be used to reduce (aggregate) demand (1) thus reducing inflation (1)

**Up to 5 marks for why it might not:**

- likely to fall more heavily on the poor (1) increase income inequality (1)
- increases firms' costs of production (1) raises price of products (1) causing cost-push inflation (1)
- may reduce spending (1) reducing output (1) increasing unemployment (1)
- may be placed on products that are already under-consumed (1) increase inefficiency (1)

Page 11	Mark Scheme	Syllabus	Paper
	Cambridge IGCSE – October/November 2015	0455	21

7 (a) Define 'mixed economy'. [2]

- an economy with a private sector (1) and a public sector (1)
- a mix of both free market (1) and planned economies (1)
- resources allocated by both the price mechanism (1) and government decisions/consumers and government deciding what is produced (1)
- some prices determined by market forces (1) and some by directives/the government (1)

(b) Explain two reasons why the world population in 2050 may be more than forecast. [4]

- birth rate may be higher than expected (1) due to e.g. lack of education, children needed to work because of poverty (1)
- death rate may be lower than expected (1) due to e.g. healthcare provision being of a higher quality/more widely available (1)
- economic forecasts are often inaccurate (1) the further ahead a forecast is the less accurate it tends to be as more can change (1)

(c) Analyse how the population structure of a developing country is likely to differ from that of a developed country. [6]

- a developing country is likely to have a younger population (1) may have a higher birth rate (1) due to e.g. lower cost of raising children/need for children to support their parents later in life (1)
- a developing country may experience net emigration whereas a developed country may experience net immigration (1) due to differences in living standards (1)
- a developed country is likely to have small families (1) due to e.g. social attitudes (1)
- a developed country is likely to have more awareness of contraception (1) due to greater educational/healthcare provision (1)
- a developed country is likely to have an older population (1) a developed country may have a lower death rate (1) due to e.g. better healthcare/nutrition (1)

Up to 2 marks for a correctly labelled population pyramid(s)

(d) Discuss the effectiveness of possible government policy measures to reduce the growth of population. [8]

**Up to 5 marks for why policy measures may be effective:**

- improved/increased education (1) raise the cost of having children (1) people in education tend to delay having children (1) more educated women are likely to work and have fewer children (1) increase information about contraception (1) lower birth rate (1)
- improved/increased healthcare (1) lower infant mortality rate may reduce number of children people have (1) as more expected to survive (1)
- improved/increased state provision of healthcare and pensions (1) reduce need to have children to support adults in old age (1)
- tighter immigration restrictions (1) may reduce inward migration (1)
- remove state benefits for having children (1) may increase the cost to families of bringing up children (1)
- adopt a "one child per family" policy, such as in China (1) directly reducing population growth (1)

Page 12	Mark Scheme	Syllabus	Paper
	Cambridge IGCSE – October/November 2015	0455	21

**Up to 5 marks for why policy measures may not be effective:**

- improved/increased education may also lower death rate (1) is more likely to lead to healthier lives e.g. eat more nutritious food (1) have higher incomes and so better living standards (1) may also reduce emigration (1) as may be more job opportunities (1)
- improved/increased healthcare is also likely to reduce death rate (1) if death rate falls by more than birth rate, population may continue to increase (1)
- tighter immigration restrictions may make it difficult for firms to obtain skilled labour (1) may increase dependency ratio (1) may be difficult to stop people entering the country (1)
- remove state benefits for having children may increase poverty (1) as poor families may have a large number of children/be less able to afford to raise children (1) this may increase infant mortality (1) and as a result people may have more children (1)
- adopting a “one child policy” causes problems with population structure (1) e.g. lack of young people to support the elderly population (1)

